



PRE - TEST WORKSHEET (2020-21)

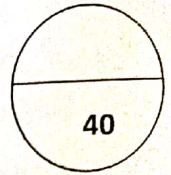
NAME: _____

ROLL NO: _____

DATE: _____

CLASS : I DIV : _____

SUBJECT : MATHS



PAPER - 1

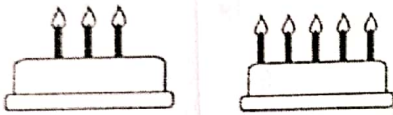
I. Colour the shape which is in between :

Marks : 1x1=1




II. Circle the cake with less candles :

Marks : 1x1=1




III. Circle the pot near the tree and cross the pot far away from the tree:

Marks : 2x1=2





IV. Circle the group that has more :

Marks : 4x1=4







V. Circle the big object and cross the small object :

Marks : $2 \times 1 = 2$




VI. Count and circle the correct number in the group :

Marks : $4 \times 1 = 4$

 <p>4 3 2</p>	 <p>3 6 5</p>
 <p>9 8 10</p>	 <p>6 9 8</p>


VII. Circle the flower pot that has zero flower :

Marks : $2 \times 1 = 2$



VIII. Circle the smaller number in the following :

Marks : $2 \times 1 = 2$




IX. Circle the greater number in the following :


Marks : $2 \times 1 = 2$




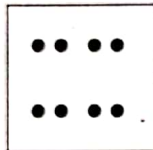
X. Count the dots in each box and write number and number names :


Marks:5x1=5

a.  _____

b.  _____









c.  _____

d.  _____

e.  _____

XI. Fill in the missing numbers :


Marks:8x½=4

- a) 2  4
- b)  8 
- c) 3  5 
- d) 6  8
- e)  2 



XII. Draw equal number of objects in the given box :

Marks:4x1=4

a) 



b)



d)



XIII. Write the between numbers in the following :

Marks: $6 \times \frac{1}{2} = 3$

a) 5 9

b) 2 6

XIV. Insert $<$ or $>$ sign in the given box :

Marks: $4 \times \frac{1}{2} = 2$

a) Nine Two

b) 6 Seven

c) 5 0

d) One 4

XV. Complete the tables of 2 :

Marks: $4 \times \frac{1}{2} = 2$

$2 \times 1 = 2$	$2 \times 4 = 8$	$2 \times 7 = \underline{\quad}$	
$2 \times 2 = \underline{\quad}$	$2 \times 5 = \underline{\quad}$	$2 \times 8 = 16$	
$2 \times 3 = 6$	$2 \times 6 = 12$	$2 \times 9 = \underline{\quad}$	$2 \times 10 = 20$

*****ALL THE BEST*****